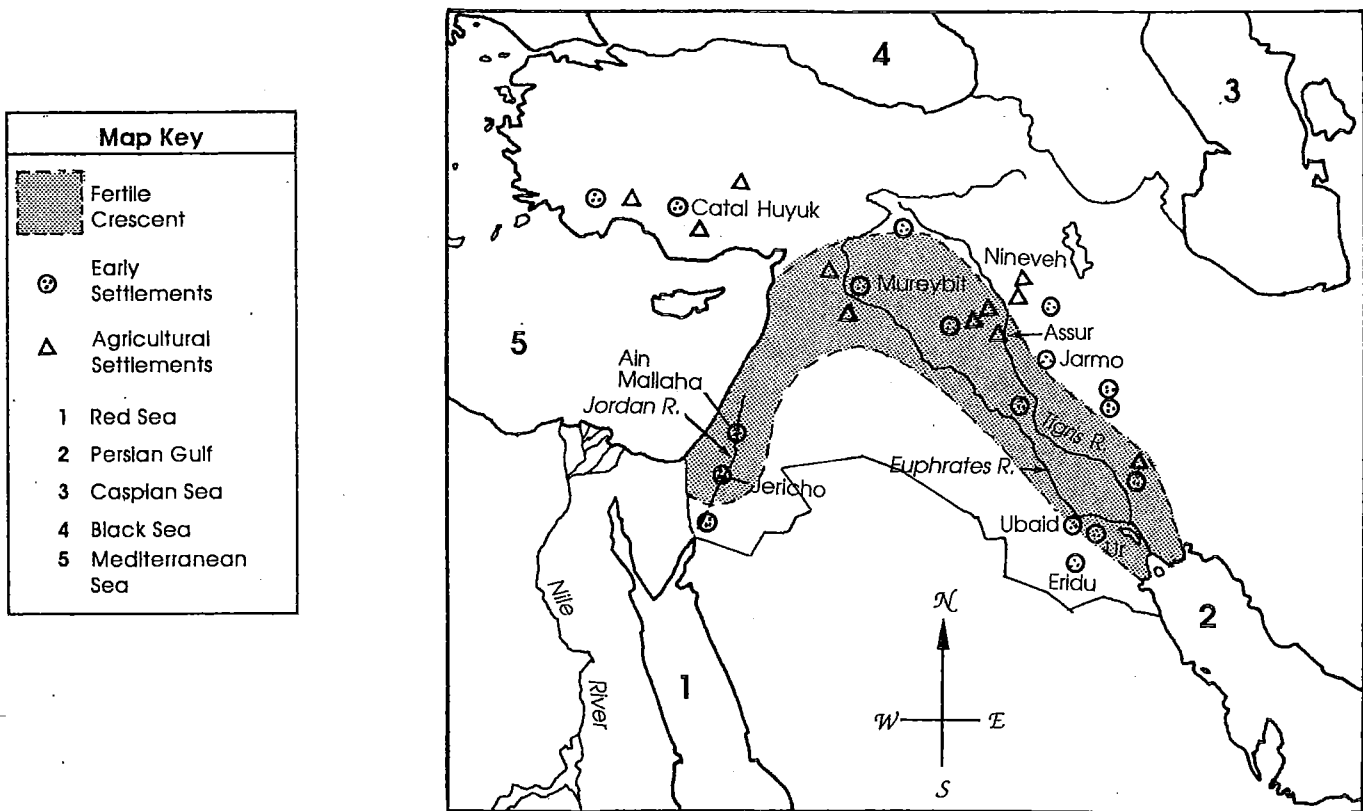


Fertile Crescent

Name _____

Use this map and a modern map of the world to answer the questions.



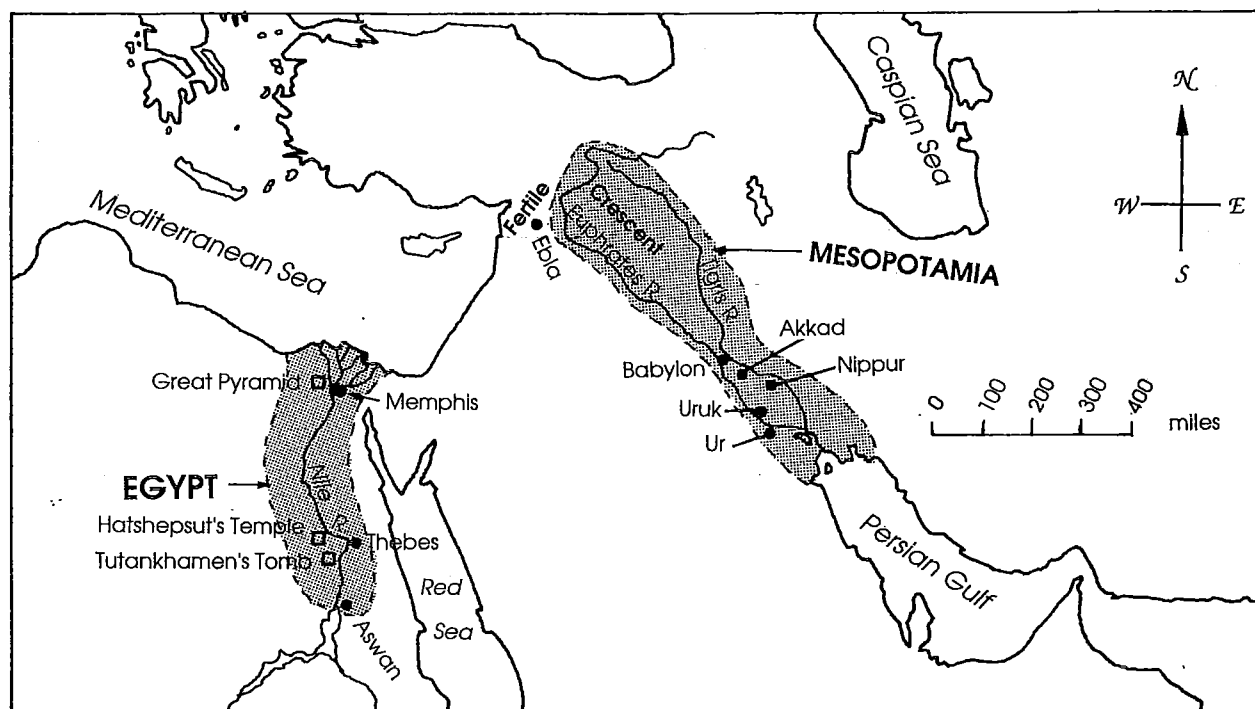
- The area enclosed by broken lines was called the _____.
- What symbol shows the location of agricultural settlements? _____
- Name the two rivers that ran almost the whole length of the Fertile Crescent.

- Jericho was located near the _____ River.
- In the blank beside each location, place an **E** for early settlement or an **A** for agricultural settlement.
 A. Jericho _____ C. Mureybit _____ E. Jarmo _____ G. Ubad _____
 B. Ur _____ D. Assur _____ F. Nineveh _____
- Identify each numbered body of water on the map.
 1. _____ 4. _____
 2. _____ 5. _____
 3. _____
- Use a blue crayon to trace the routes of all four rivers on the map.
- On the map, label each of the numbered bodies of water.
- Outline the Fertile Crescent with a red crayon.

Permanent Cities

Name _____

Use this map and a ruler to answer the questions.



- Mesopotamia was bordered on the south by which body of water? _____
- Name the two rivers which helped form the Fertile Crescent. _____

- The city of Memphis was located on the banks of the _____ River.
- Name the three seas shown on the map. _____

- _____ tomb was northwest of Aswan.
- In which direction was the Great Pyramid from Memphis? _____
- Name the city east of Hatshepsut's Temple. _____
- Name the river which flows through Egypt. _____
- Name the area – either Egypt or Mesopotamia – where each city was located.

A. Babylon _____	D. Aswan _____
B. Ur _____	E. Akkad _____
C. Thebes _____	
- Use a ruler and the scale to measure these approximate distances in miles.

A. Babylon to Ur _____	D. Aswan to Uruk _____
B. Ebla to Nippur _____	E. Memphis to Aswan _____
C. Thebes to Ur _____	F. Babylon to Memphis _____

Ancient Egypt

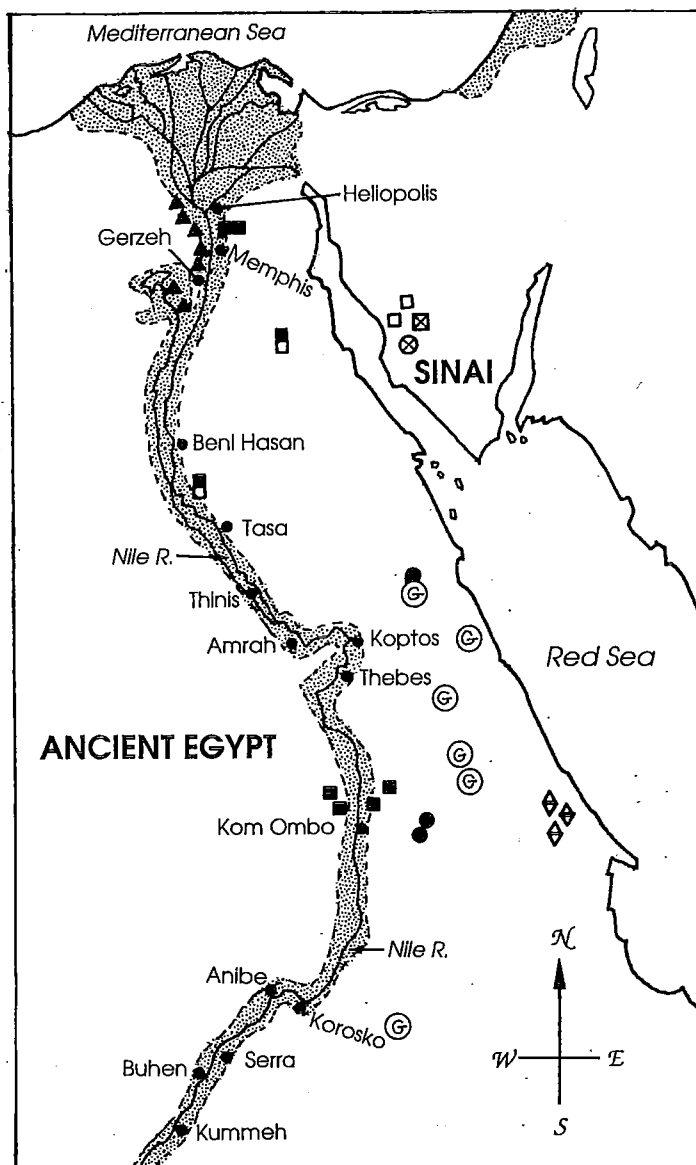
Name _____

Use this map to answer the questions below.

1. The _____ River flowed through the center of Ancient Egypt.
2. Were the pyramids located north or south of the Mediterranean Sea? _____
3. Name the three minerals found in the Sinai region. _____

4. What mineral was found between Beni Hasan and Tasa? _____
5. Emeralds were found on the banks of the _____ Sea.
6. _____ was found east of Korosko.
7. _____ was found in four locations close to Kom Ombo.
8. There was a _____ deposit between Heliopolis and Memphis.
9. There are _____ pyramids on the map.
10. Gold was found in _____ different sites.
11. Write the correct letter — E or W — to tell whether these cities were on the eastern or western side of the Nile River.

- | | |
|-----------------|-----------------|
| A. Anibe _____ | E. Thebes _____ |
| B. Buhen _____ | F. Tasa _____ |
| C. Kummeh _____ | G. Gerzeh _____ |
| D. Serra _____ | H. Amrah _____ |



Map Key

	Area of Cultivation		Alabaster
	Pyramids		Limestone
	Gold		Copper
	Emerald		Turquoise
	Granite		Garnet
	Sandstone		